

# Solutions - Quiz 1

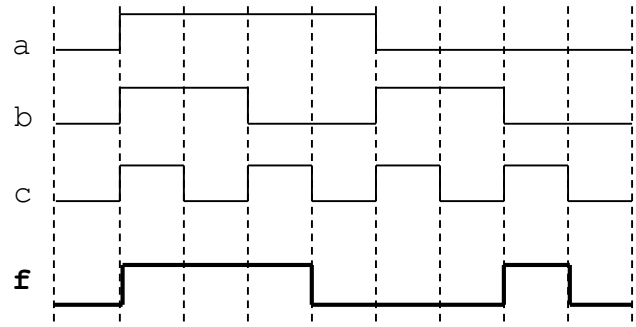
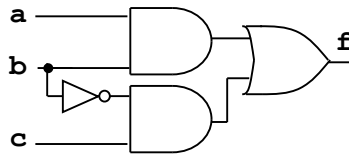
(January 26<sup>th</sup> @ 5:30 pm)

## PROBLEM 1 (40 PTS)

- The following is the timing diagram of a logic circuit with three inputs. Simplify the Boolean expression of the circuit and sketch the minimized circuit.

ab \ c	00	01	11	10
0	0	0	1	0
1	1	0	1	1

$$f = ab + \bar{b}c$$



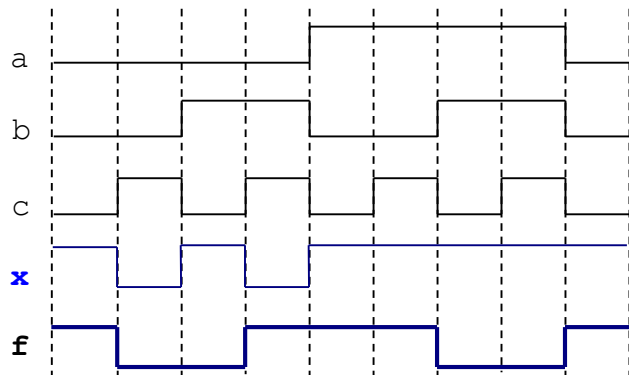
## PROBLEM 2 (30 PTS)

- Complete the timing diagram of the logic circuit whose VHDL description is shown below:

```
library ieee;
use ieee.std_logic_1164.all;

entity test is
  port ( a, b, c: in std_logic;
        f: out std_logic);
end test;

architecture struct of test is
  signal x: std_logic;
begin
  x <= a or (not (c));
  f <= x xor b;
end struct;
```



## PROBLEM 3 (30 PTS)

- Complete the timing diagram of the digital circuit shown below. You must consider the propagation delays. Assume the propagation delay of every gate is 5 ns. The initial values of all signals are plotted in the figure.

